







**ASSIGNMENT #2**  
**Chapter 1: All about a Computer**

**Subject: Computer**      **Class: III**      **Teacher: Mrs. Gurpreet Kaur**  
**Name: \_\_\_\_\_**      **Class & Sec: \_\_\_\_\_**      **Roll No. \_\_\_\_\_**      **Date: \_\_\_\_\_**

**Q1. Write (I) for Input device and (O) for output device in boxes given below:**

a) <b>Web camera</b> 	<input type="checkbox"/>
b) <b>Speakers</b> 	<input type="checkbox"/>
c) <b>Keyboard</b> 	<input type="checkbox"/>
d) <b>Printer</b> 	<input type="checkbox"/>
e) <b>Monitor</b> 	<input type="checkbox"/>
f) <b>Headphone</b> 	<input type="checkbox"/>

**Q2. Write full form of IPO**

---

**Q3. Fill in the input and output**






a) If the problem given to a computer is  $4+5 = 9$ :

Then input is \_\_\_\_\_ output is \_\_\_\_\_

b) If the problem given to a computer is  $10-5 = 5$ :

Then input is \_\_\_\_\_ output is \_\_\_\_\_

**Q4. Write name of following pictures:**

a) 	_____
b) 	_____
c) 	_____
d) 	_____
e) 	_____